

Name : _____

Score : _____

Teacher : _____

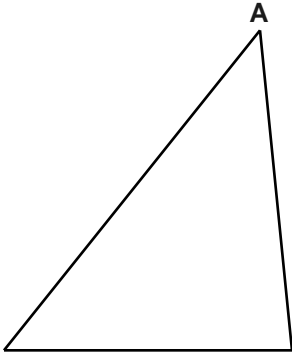
Date : _____

Perpendicular Bisectors

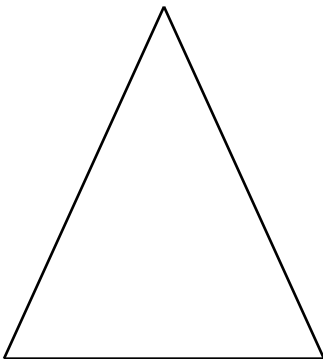
- 1) Construct the perpendicular bisector of the given segment.



- 2) Construct the perpendicular bisector of the side opposite A.



- 3) Locate the circumcenter of the triangle.



Name : _____

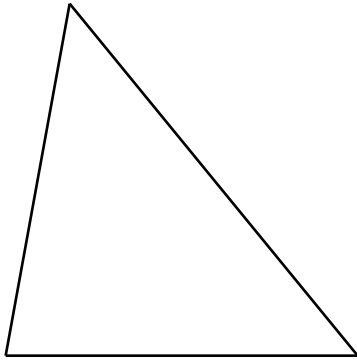
Score : _____

Teacher : _____

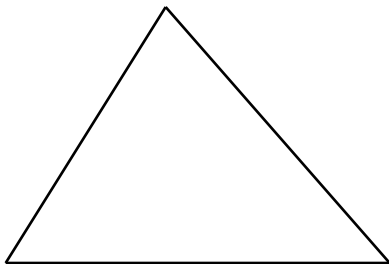
Date : _____

Perpendicular Bisectors

- 4) Construct all 3 perpendicular bisectors of the triangle to show their concurrence.



- 5) Circumscribe a circle about the triangle.



Name : _____

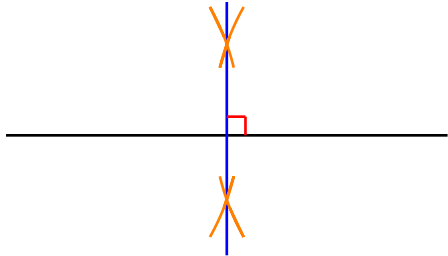
Score : _____

Teacher : _____

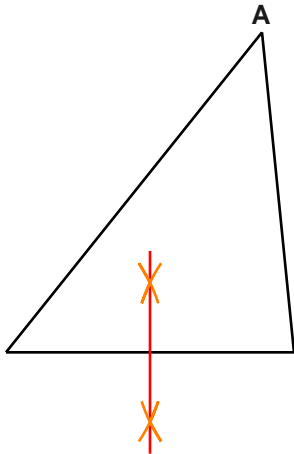
Date : _____

Perpendicular Bisectors

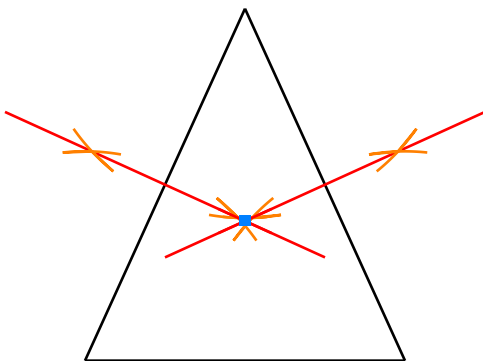
- 1) Construct the perpendicular bisector of the given segment.



- 2) Construct the perpendicular bisector of the side opposite A.



- 3) Locate the circumcenter of the triangle.



Name : _____

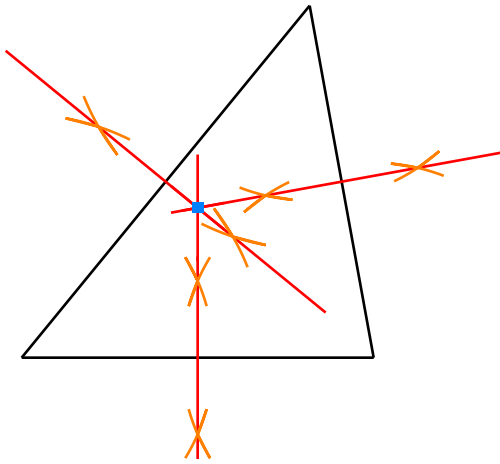
Score : _____

Teacher : _____

Date : _____

Perpendicular Bisectors

- 4) Construct all 3 perpendicular bisectors of the triangle to show their concurrence.



- 5) Circumscribe a circle about the triangle.

