

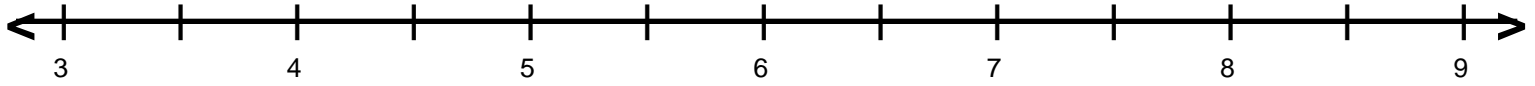
Name : _____

Score : _____

Teacher : _____

Date : _____

Decimal Numbers on Number Lines

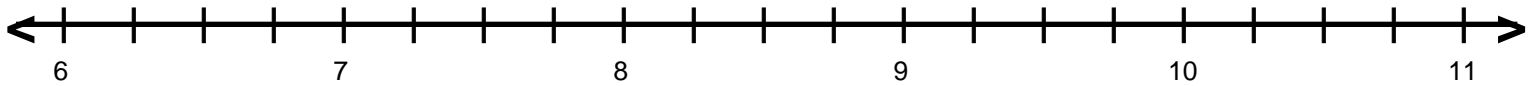


A = 4.5

B = 5.5

C = 6.5

D = 7.5

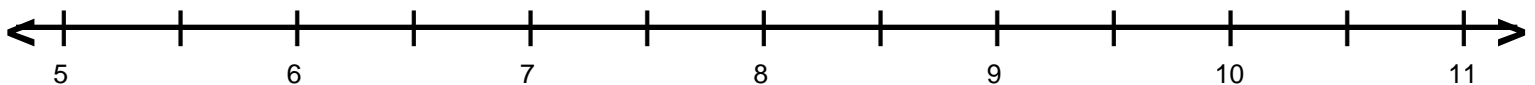


A = 7.25

B = 9.25

C = 6.5

D = 8.75

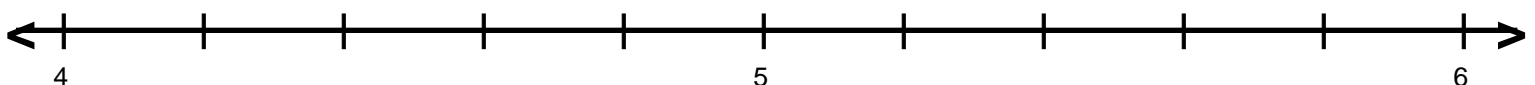


A = 8.5

B = 9.5

C = 5.5

D = 6.5

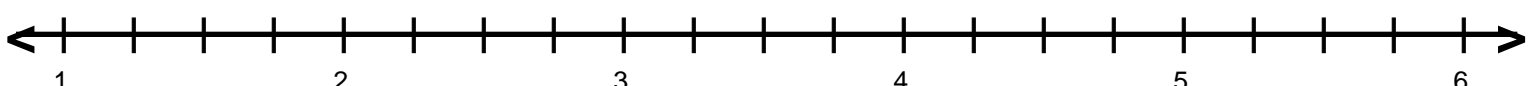


A = 4.4

B = 4.8

C = 5.6

D = 4.2



A = 2.5

B = 3.75

C = 4.25

D = 1.25

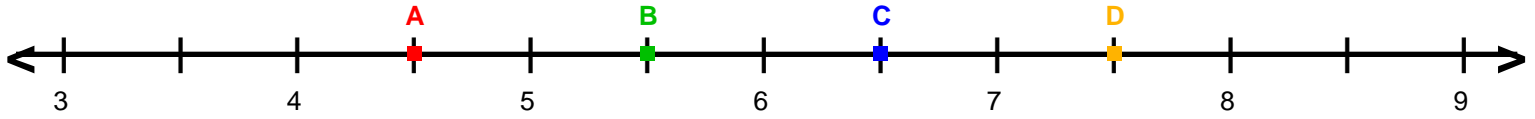
Name : _____

Score : _____

Teacher : _____

Date : _____

Decimal Numbers on Number Lines

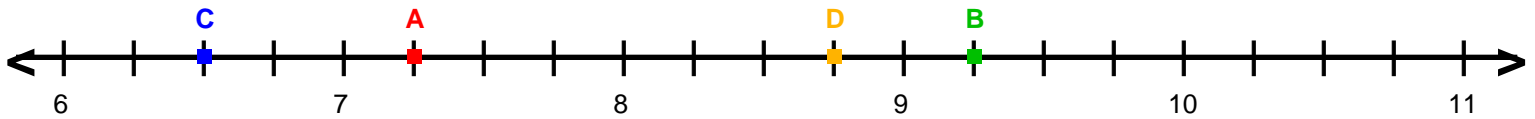


A = 4.5

B = 5.5

C = 6.5

D = 7.5

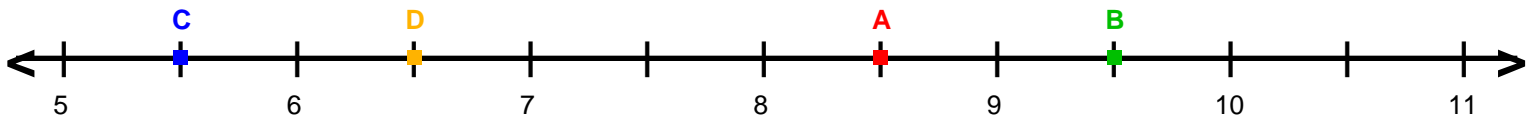


A = 7.25

B = 9.25

C = 6.5

D = 8.75

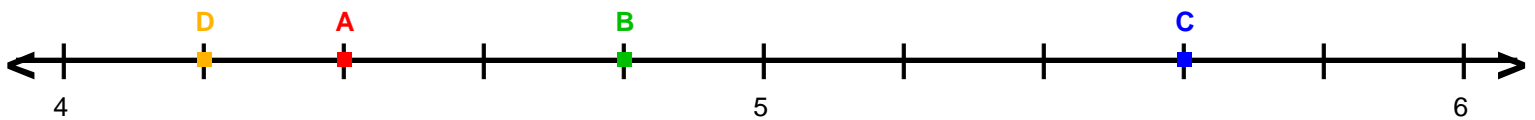


A = 8.5

B = 9.5

C = 5.5

D = 6.5

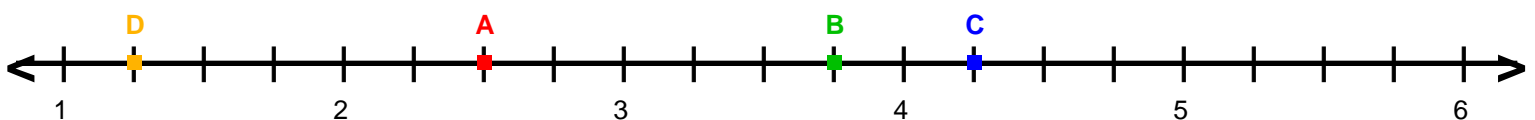


A = 4.4

B = 4.8

C = 5.6

D = 4.2



A = 2.5

B = 3.75

C = 4.25

D = 1.25