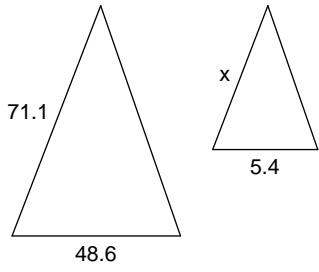


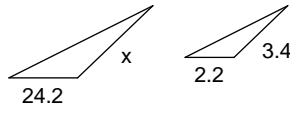
Similar Figures - Practice

Each pair of figures is similar. Find the missing side.

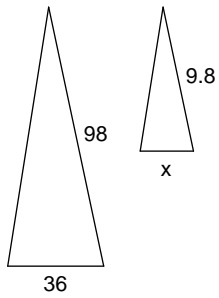
1)



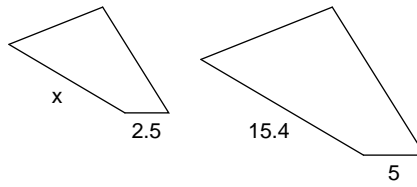
2)



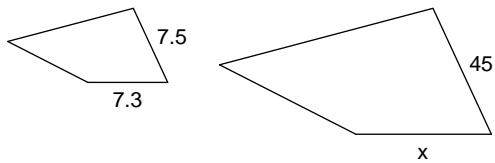
3)



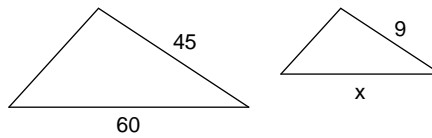
4)



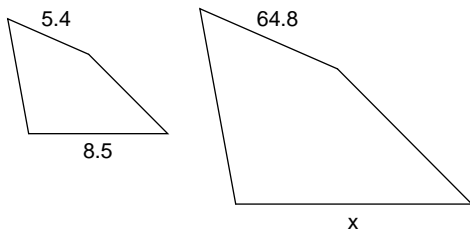
5)



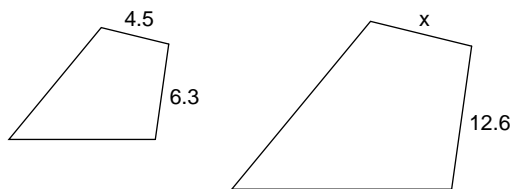
6)



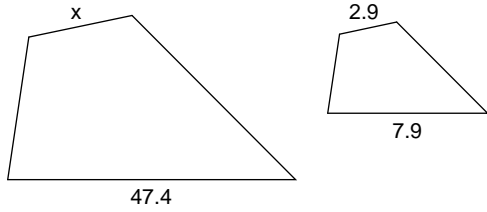
7)



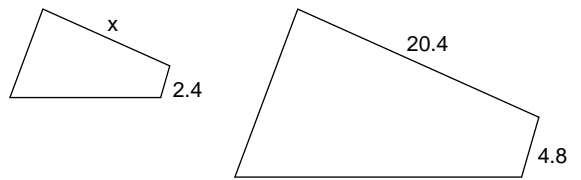
8)



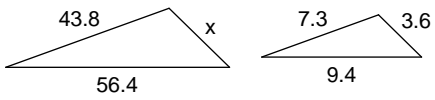
9)



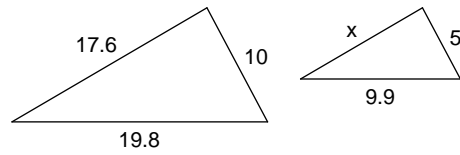
10)



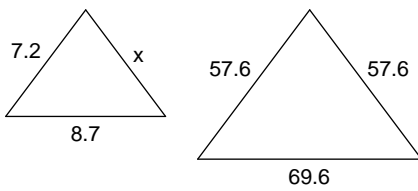
11)



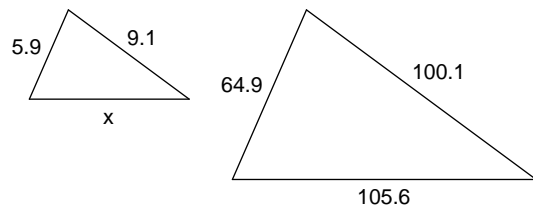
12)



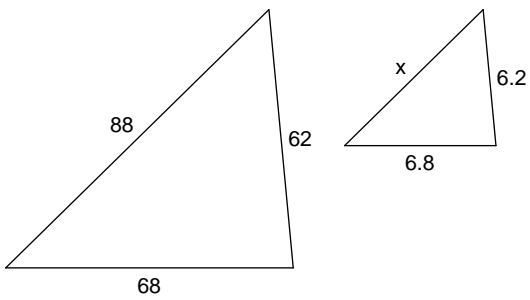
13)



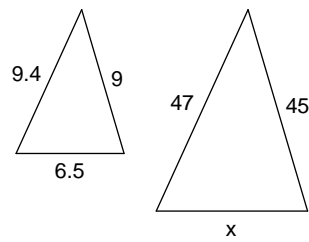
14)

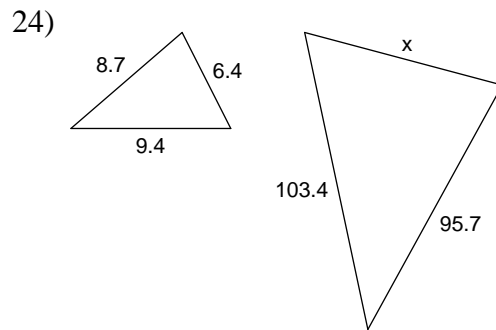
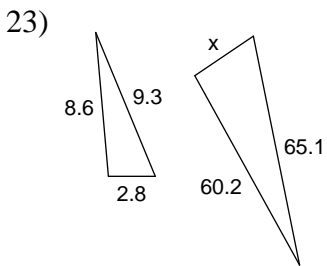
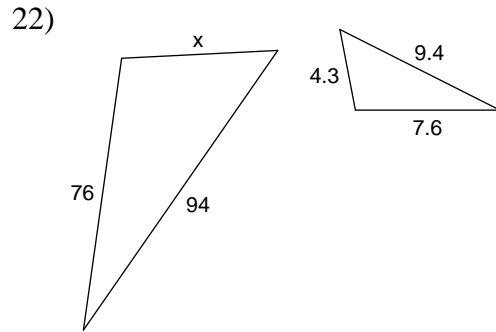
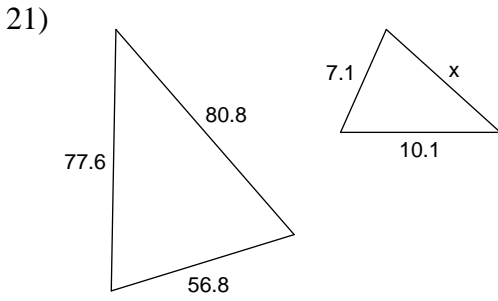
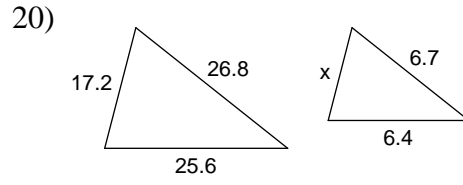
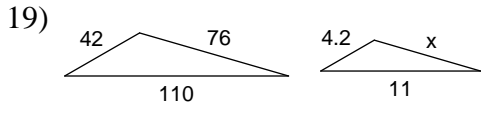
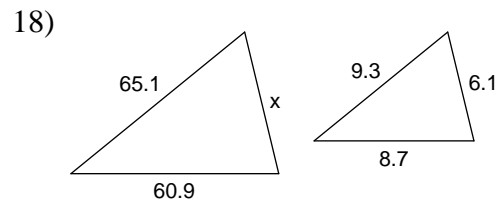
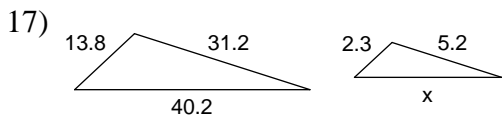


15)

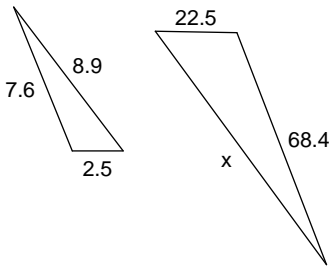


16)

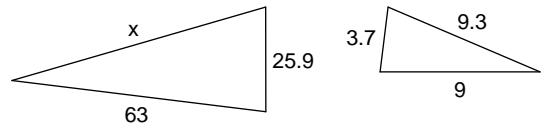




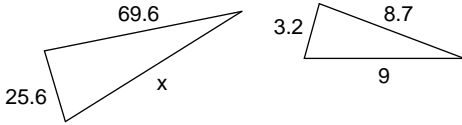
25)



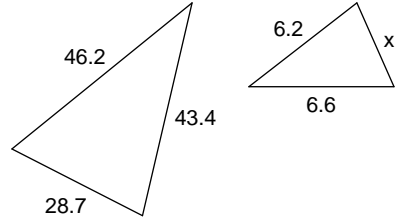
26)



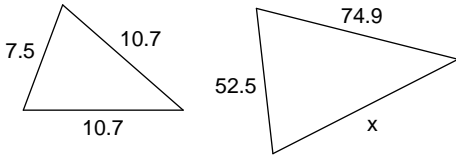
27)



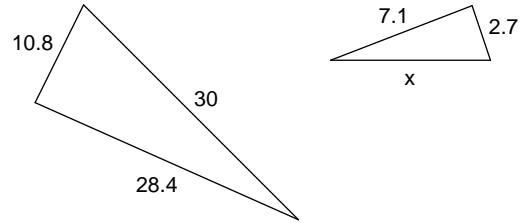
28)



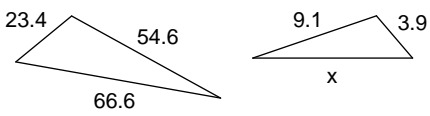
29)



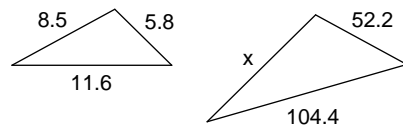
30)



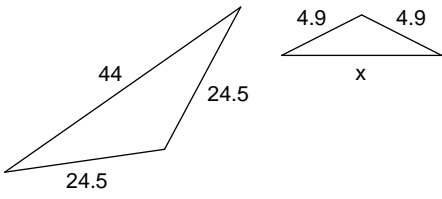
31)



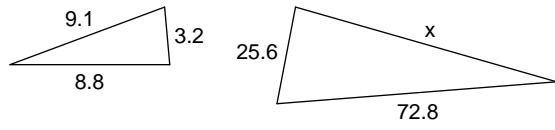
32)



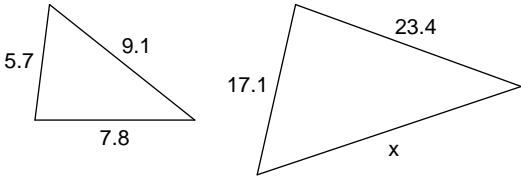
33)



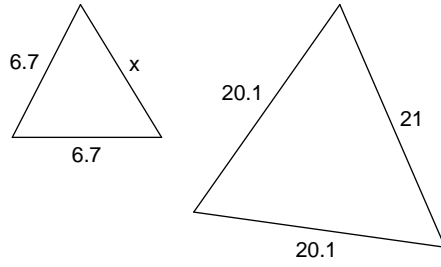
34)



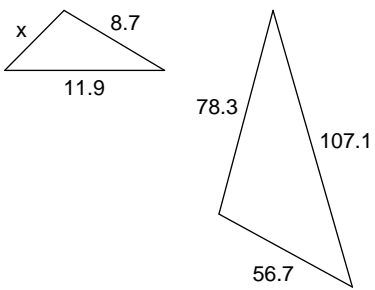
35)



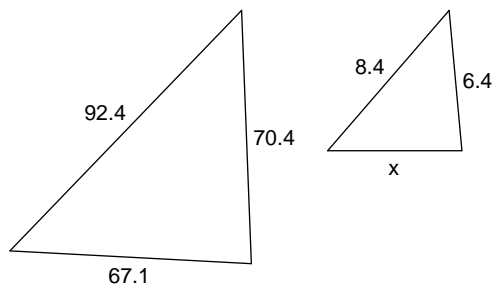
36)



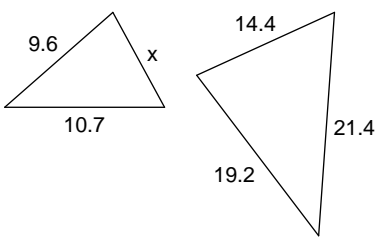
37)



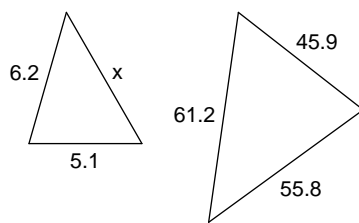
38)



39)



40)



Answers to Similar Figures - Practice (ID: 1)

- | | | | |
|----------|----------|----------|----------|
| 1) 7.9 | 2) 37.4 | 3) 3.6 | 4) 7.7 |
| 5) 43.8 | 6) 12 | 7) 102 | 8) 9 |
| 9) 17.4 | 10) 10.2 | 11) 21.6 | 12) 8.8 |
| 13) 7.2 | 14) 9.6 | 15) 8.8 | 16) 32.5 |
| 17) 6.7 | 18) 42.7 | 19) 7.6 | 20) 4.3 |
| 21) 9.7 | 22) 43 | 23) 19.6 | 24) 70.4 |
| 25) 80.1 | 26) 65.1 | 27) 72 | 28) 4.1 |
| 29) 74.9 | 30) 7.5 | 31) 11.1 | 32) 76.5 |
| 33) 8.8 | 34) 70.4 | 35) 27.3 | 36) 7 |
| 37) 6.3 | 38) 6.1 | 39) 7.2 | 40) 6.8 |